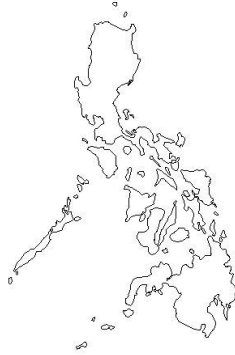


Name the Middle Eastern or Far Eastern Country depicted in each outline map.

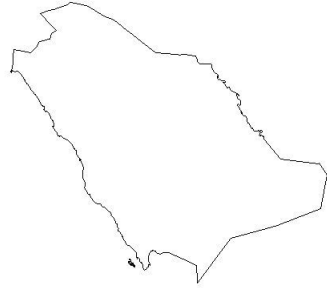
Team Name: _____



1. _____



2. _____



3. _____



4. _____



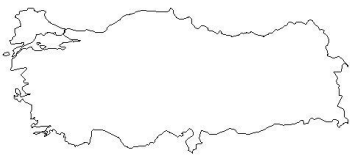
5. _____



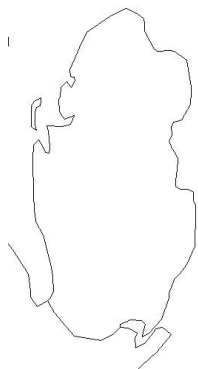
6. _____



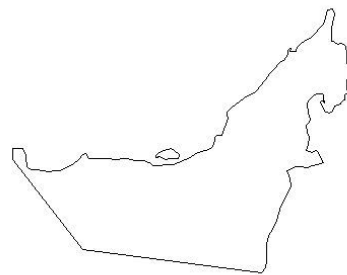
7. _____



8. _____



9. _____

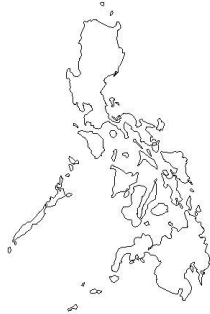


10. _____

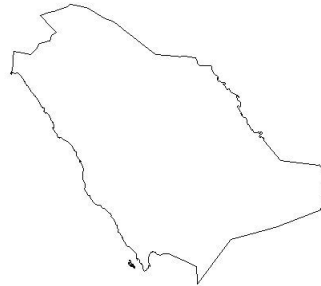
ANSWERS



1. Afghanistan



2. Philippines



3. Saudi Arabia



4. Oman



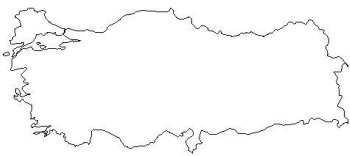
5. China




6. Japan



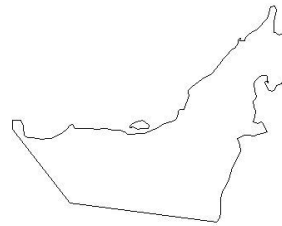
7. Pakistan



8. Turkey



9. Qatar



10. UAE