


Name the following countries from their outlines below:




1: \_\_\_\_\_



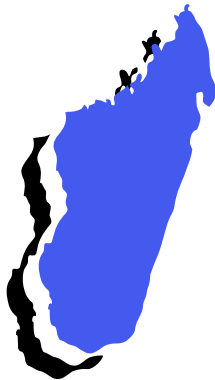
2: \_\_\_\_\_



3: \_\_\_\_\_



4: \_\_\_\_\_



5: \_\_\_\_\_



6: \_\_\_\_\_



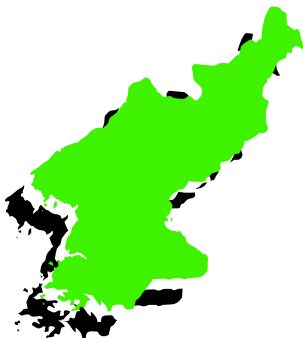
7: \_\_\_\_\_



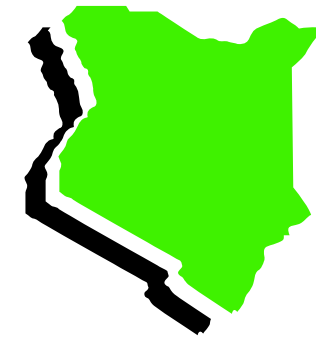
8: \_\_\_\_\_



9: \_\_\_\_\_



10: \_\_\_\_\_



11: \_\_\_\_\_



12: \_\_\_\_\_


And here are the answers:




1: Finland



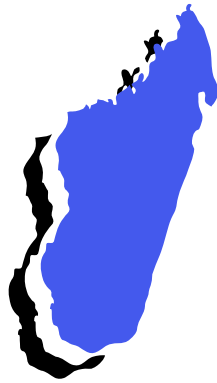
2: China



3: Benin



4: Austria



5: Madagascar



6: Estonia



7: Chad



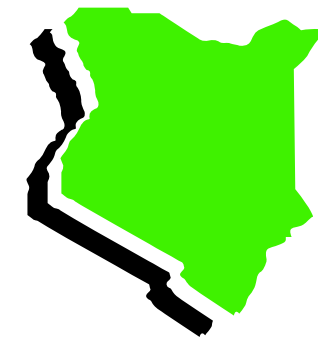
8: Peru



9: Laos



10: North Korea



11: Kenya



12: Iraq